

DC CIRCUITS

LECTURE NOTES

Branch: CSE/IT

Semester: Second

Subject Teacher:

Vishwajeet Singh, Lecturer Electronics

Mahamaya Polytechnic of Information

Technology, Salempur, Hathras

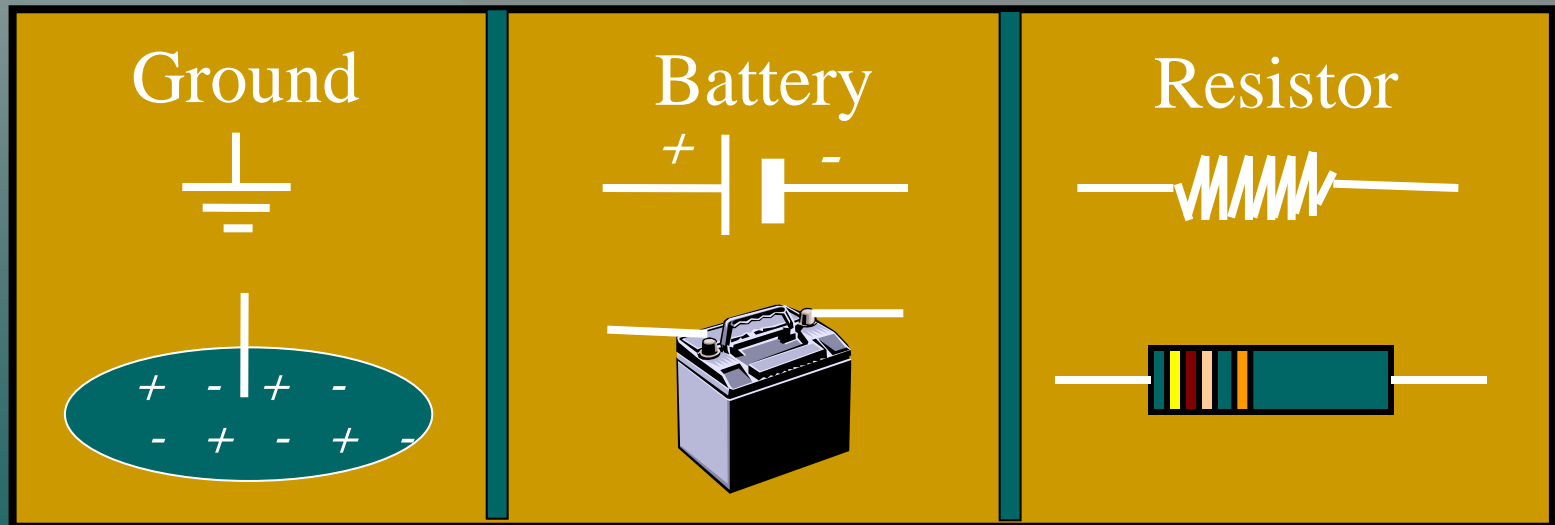
Objectives: After completing this module, you should be able to:

- Determine the **effective resistance** for a number of resistors connected in **series** and in **parallel**.
- For **simple** and **complex** circuits, determine the **voltage** and **current** for each resistor.
- Apply **Kirchoff's laws** to find currents and voltages in complex circuits.

Electrical Circuit Symbols

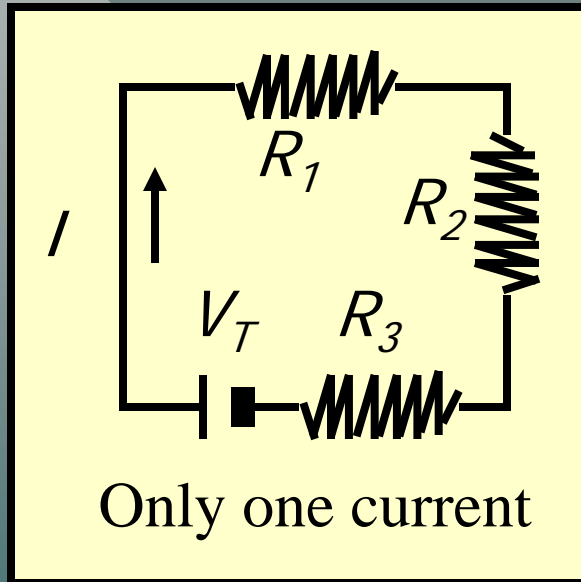
Electrical circuits often contain one or more resistors grouped together and attached to an energy source, such as a battery.

The following symbols are often used:



Resistances in Series

Resistors are said to be connected in **series** when there is a **single path** for the current.



The current I is the same for each resistor R_1 , R_2 and R_3 .

The energy gained through \mathcal{E} is lost through R_1 , R_2 and R_3 .

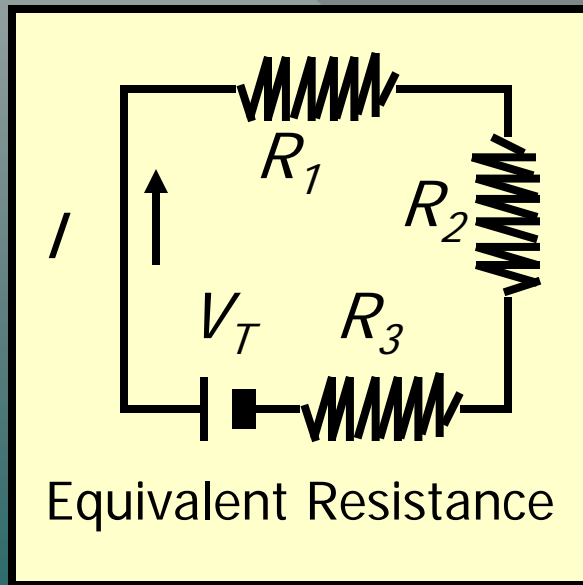
The same is true for voltages:

For series connections:

$$I = I_1 = I_2 = I_3$$
$$V_T = V_1 + V_2 + V_3$$

Equivalent Resistance: Series

The **equivalent resistance** R_e of a number of resistors connected in series is equal to the **sum** of the individual resistances.



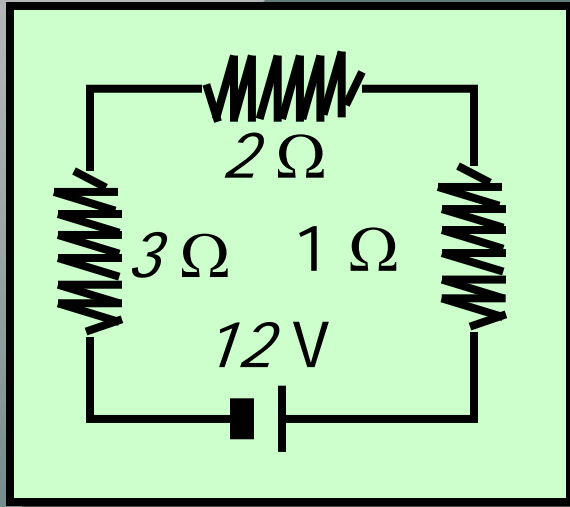
$$V_T = V_1 + V_2 + V_3 ; (V = IR)$$

$$I_T R_e = I_1 R_1 + I_2 R_2 + I_3 R_3$$

$$\text{But} \dots I_T = I_1 = I_2 = I_3$$

$$R_e = R_1 + R_2 + R_3$$

Example 1: Find the equivalent resistance R_e .
What is the current I in the circuit?



$$R_e = R_1 + R_2 + R_3$$

$$R_e = 3\ \Omega + 2\ \Omega + 1\ \Omega = 6\ \Omega$$

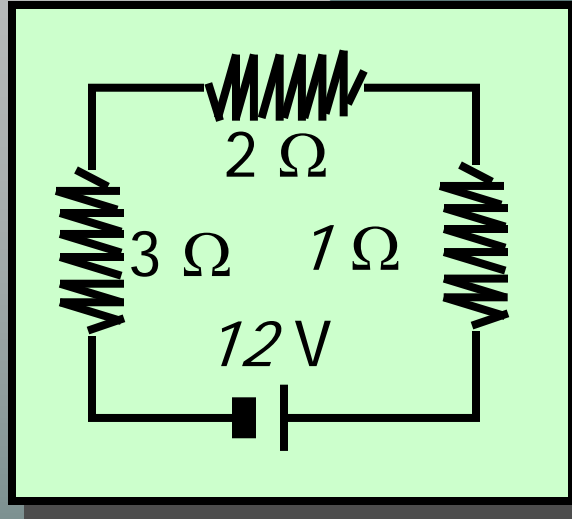
$$\text{Equivalent } R_e = 6\ \Omega$$

The current is found from Ohm's law: $V = IR_e$

$$I = \frac{V}{R_e} = \frac{12\ \text{V}}{6\ \Omega}$$

$$I = 2\ \text{A}$$

Example 1 (Cont.): Show that the voltage drops across the three resistors totals the 12-V emf.



$$R_e = 6 \Omega$$

$$I = 2 \text{ A}$$

Current $I = 2 \text{ A}$ same in each R.

$$V_1 = IR_1; \quad V_2 = IR_2; \quad V_3 = IR_3$$

$$V_1 = (2 \text{ A})(1 \Omega) = 2 \text{ V}$$

$$V_2 = (2 \text{ A})(2 \Omega) = 4 \text{ V}$$

$$V_3 = (2 \text{ A})(3 \Omega) = 6 \text{ V}$$

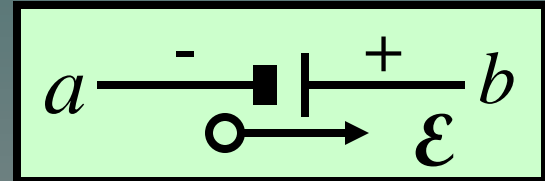
$$V_1 + V_2 + V_3 = V_T$$

$$2 \text{ V} + 4 \text{ V} + 6 \text{ V} = 12 \text{ V}$$

Check !

Sources of EMF in Series

The **output direction** from a source of emf is from **+** side:

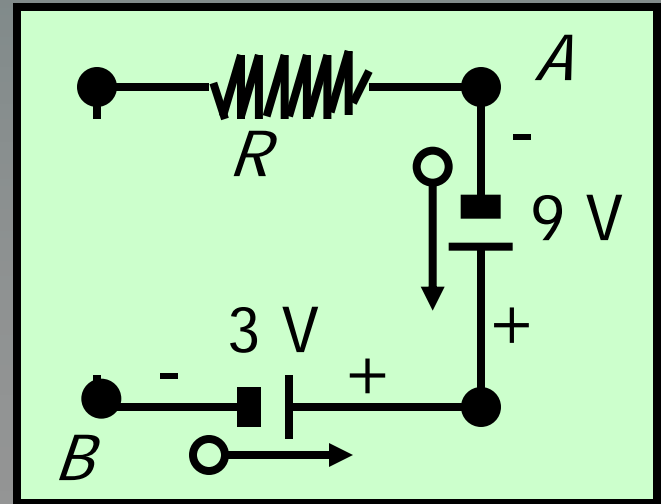


Thus, from **a** to **b** the **potential increases** by \mathcal{E} ;
From **b** to **a** , the **potential decreases** by \mathcal{E} .

Example: Find ΔV for path **AB** and then for path **BA**.

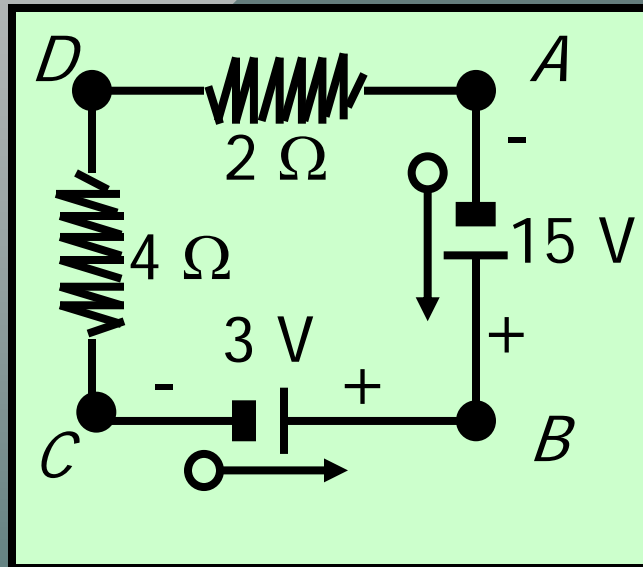
$$AB: \Delta V = +9 \text{ V} - 3 \text{ V} = +6 \text{ V}$$

$$BA: \Delta V = +3 \text{ V} - 9 \text{ V} = -6 \text{ V}$$



A Single Complete Circuit

Consider the simple **series circuit** drawn below:



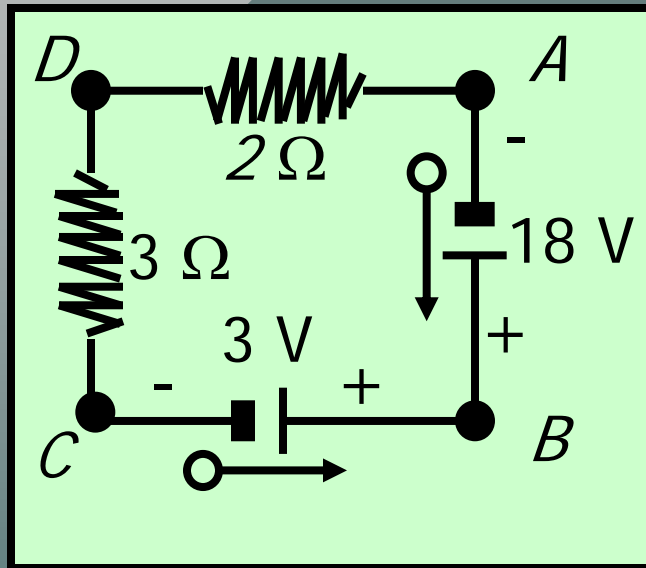
Path ABCD: Energy and V increase through the 15-V source and decrease through the 3-V source.

$$\Sigma \mathcal{E} = 15 \text{ V} - 3 \text{ V} = 12 \text{ V}$$

The net gain in potential is lost through the two resistors: these voltage drops are IR_2 and IR_4 , so that **the sum is zero for the entire loop**.

Finding I in a Simple Circuit.

Example 2: Find the current I in the circuit below:



$$\Sigma \mathcal{E} = 18 \text{ V} - 3 \text{ V} = 15 \text{ V}$$

$$\Sigma R = 3 \Omega + 2 \Omega = 5 \Omega$$

Applying Ohm's law:

$$I = \frac{\Sigma \mathcal{E}}{\Sigma R} = \frac{15 \text{ V}}{5 \Omega}$$

$$I = 3 \text{ A}$$

In general for a
single loop circuit:

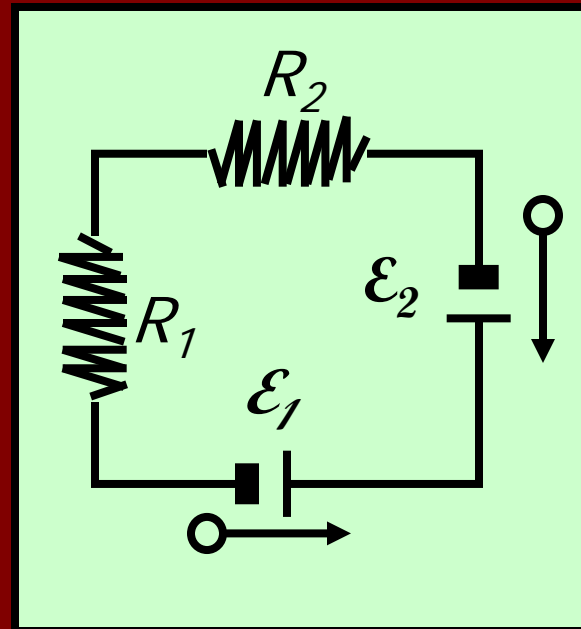
$$I = \frac{\Sigma \mathcal{E}}{\Sigma R}$$

Summary: Single Loop Circuits:

Resistance Rule: $R_e = \Sigma R$

Current: $I = \frac{\Sigma \mathcal{E}}{\Sigma R}$

Voltage Rule: $\Sigma \mathcal{E} = \Sigma IR$



Complex Circuits

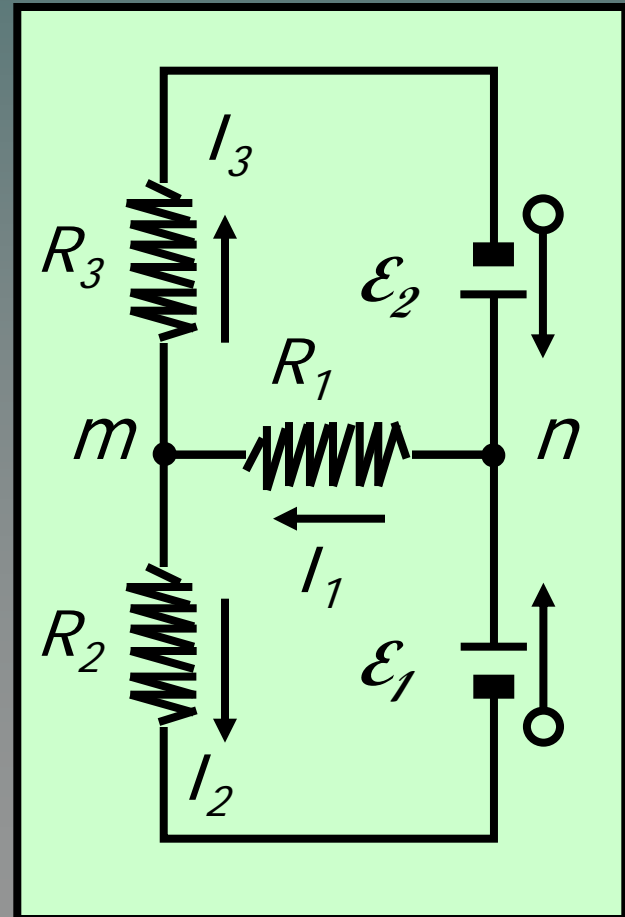
A **complex** circuit is one containing more than a single loop and different current paths.

At junctions m and n :

$$I_1 = I_2 + I_3 \text{ or } I_2 + I_3 = I_1$$

Junction Rule:

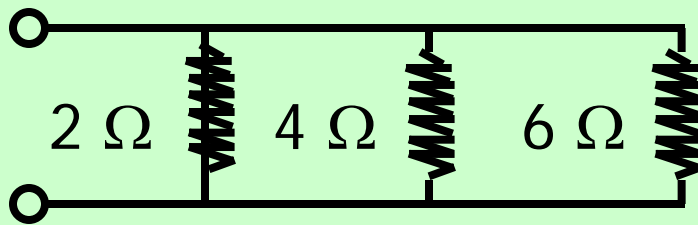
$$\Sigma I (\text{enter}) = \Sigma I (\text{leaving})$$



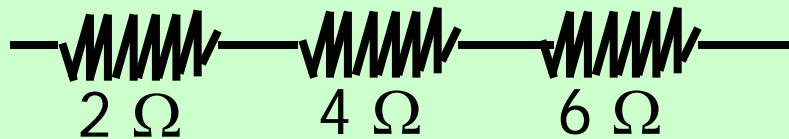
Parallel Connections

Resistors are said to be connected in **parallel** when there is more than one path for current.

Parallel Connection:



Series Connection:



For Parallel Resistors:

$$V_2 = V_4 = V_6 = V_T$$

$$I_2 + I_4 + I_6 = I_T$$

For Series Resistors:

$$I_2 = I_4 = I_6 = I_T$$

$$V_2 + V_4 + V_6 = V_T$$

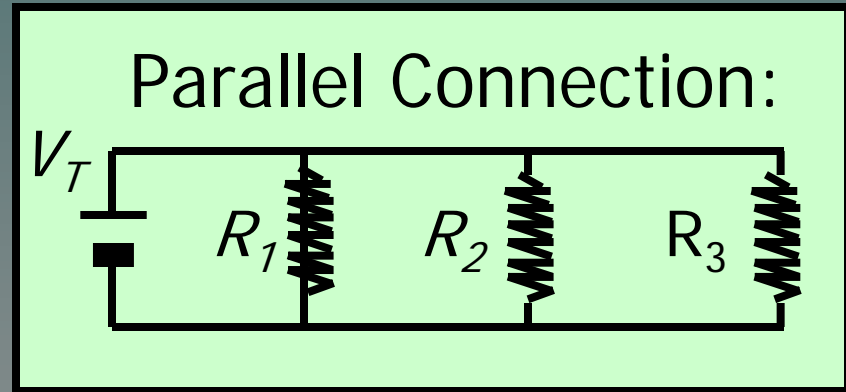
Equivalent Resistance: Parallel

$$V_T = V_1 = V_2 = V_3$$

$$I_T = I_1 + I_2 + I_3$$

Ohm's law: $I = \frac{V}{R}$

$$\frac{V_T}{R_e} = \frac{V_1}{R_1} + \frac{V_2}{R_2} + \frac{V_3}{R_3} \quad \longrightarrow \quad \frac{1}{R_e} = \frac{1}{R_1} + \frac{1}{R_2} + \frac{1}{R_3}$$

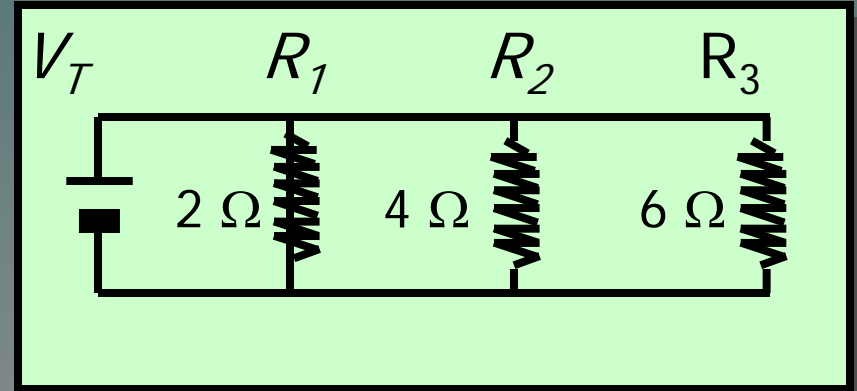


The equivalent resistance for Parallel resistors:

$$\frac{1}{R_e} = \sum_{i=1}^N \frac{1}{R_i}$$

Example 3. Find the equivalent resistance R_e for the three resistors below.

$$\frac{1}{R_e} = \sum_{i=1}^N \frac{1}{R_i}$$



$$\frac{1}{R_e} = \frac{1}{R_1} + \frac{1}{R_2} + \frac{1}{R_3}$$

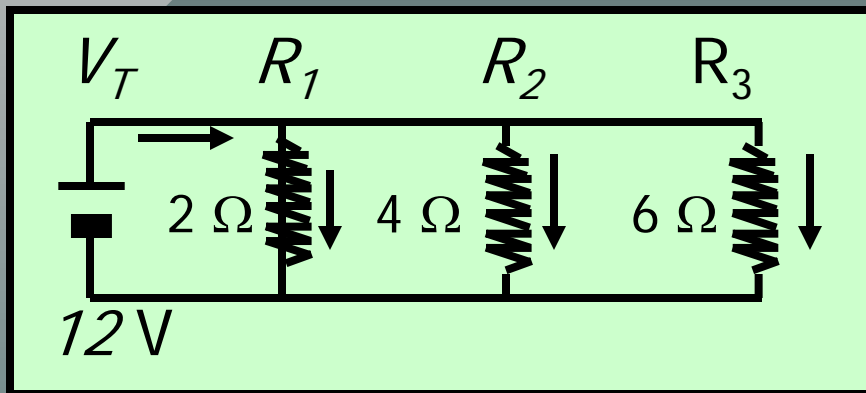
$$\frac{1}{R_e} = \frac{1}{2\ \Omega} + \frac{1}{4\ \Omega} + \frac{1}{6\ \Omega} = 0.500 + 0.250 + 0.167$$

$$\frac{1}{R_e} = 0.917; \quad R_e = \frac{1}{0.917} = 1.09\ \Omega$$

$$R_e = 1.09\ \Omega$$

For parallel resistors, R_e is less than the least R_j .

Example 3 (Cont.): Assume a 12-V emf is connected to the circuit as shown. What is the total current leaving the source of emf?



$$V_T = 12\ \text{V}; R_e = 1.09\ \Omega$$

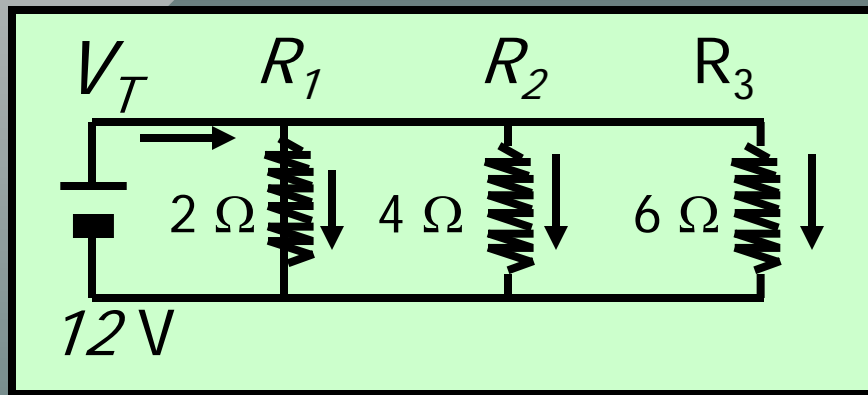
$$V_1 = V_2 = V_3 = 12\ \text{V}$$

$$I_T = I_1 + I_2 + I_3$$

Ohm's Law: $I = \frac{V}{R}$ $I_e = \frac{V_T}{R_e} = \frac{12\ \text{V}}{1.09\ \Omega}$

Total current: $I_T = 11.0\ \text{A}$

Example 3 (Cont.): Show that the current leaving the source I_T is the sum of the currents through the resistors R_1 , R_2 , and R_3 .



$$I_T = 11\text{ A}; R_e = 1.09\ \Omega$$

$$V_1 = V_2 = V_3 = 12\text{ V}$$

$$I_T = I_1 + I_2 + I_3$$

$$I_1 = \frac{12\text{ V}}{2\ \Omega} = 6\text{ A} \quad \Bigg| \quad I_2 = \frac{12\text{ V}}{4\ \Omega} = 3\text{ A} \quad \Bigg| \quad I_3 = \frac{12\text{ V}}{6\ \Omega} = 2\text{ A}$$

$$6\text{ A} + 3\text{ A} + 2\text{ A} = 11\text{ A}$$

Check !

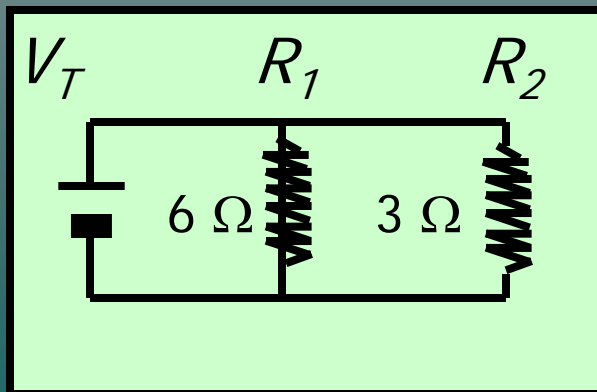
Short Cut: Two Parallel Resistors

The equivalent resistance R_e for **two** parallel resistors is the **product divided by the sum**.

$$\frac{1}{R_e} = \frac{1}{R_1} + \frac{1}{R_2};$$

$$R_e = \frac{R_1 R_2}{R_1 + R_2}$$

Example:



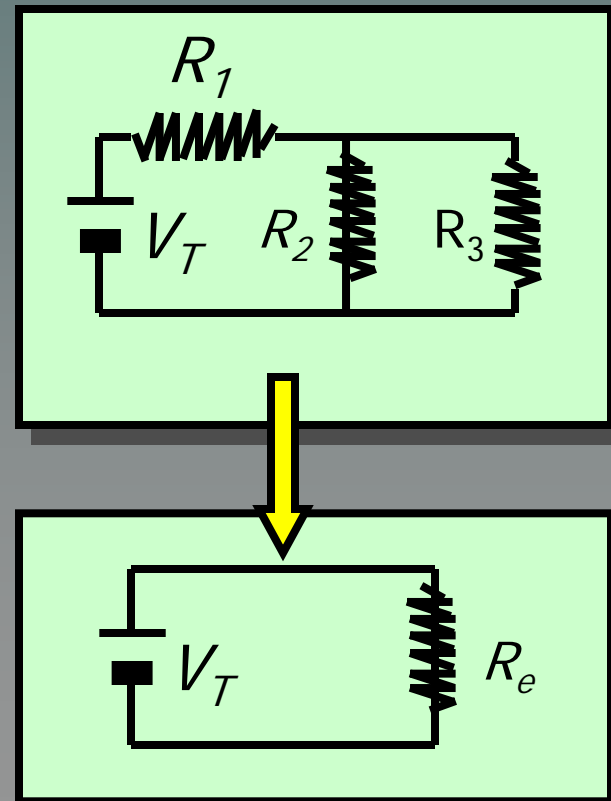
$$R_e = \frac{(3\ \Omega)(6\ \Omega)}{3\ \Omega + 6\ \Omega}$$

$$R_e = 2\ \Omega$$

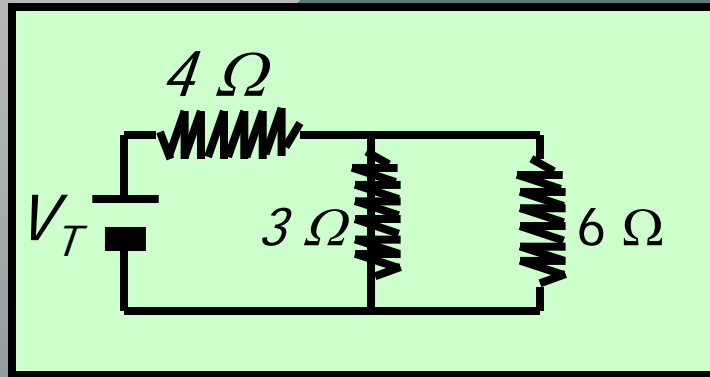
Series and Parallel Combinations

In complex circuits resistors are often connected in **both series** and **parallel**.

In such cases, it's best to use rules for series and parallel resistances to reduce the circuit to a simple circuit containing one source of emf and one equivalent resistance.



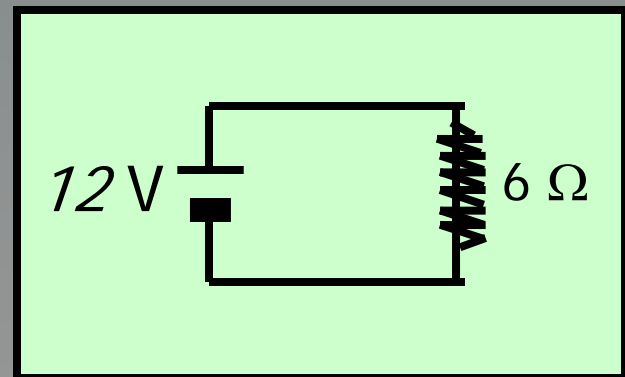
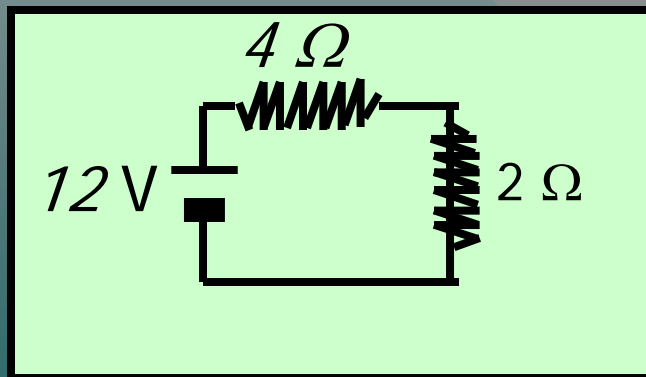

Example 4. Find the equivalent resistance for the circuit drawn below (assume $V_T = 12\text{ V}$).



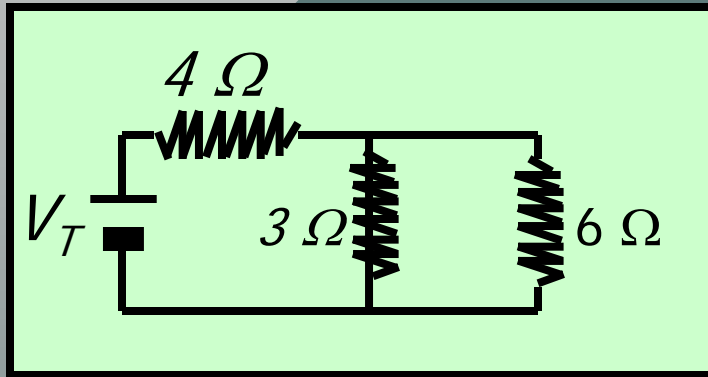
$$R_{3,6} = \frac{(3\Omega)(6\Omega)}{3\Omega + 6\Omega} = 2\Omega$$

$$R_e = 4\Omega + 2\Omega$$

$$R_e = 6\Omega$$



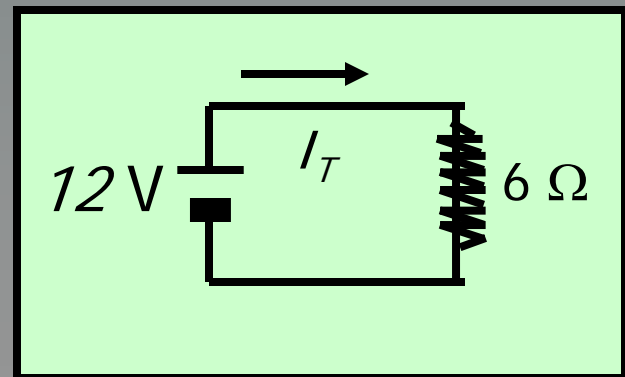

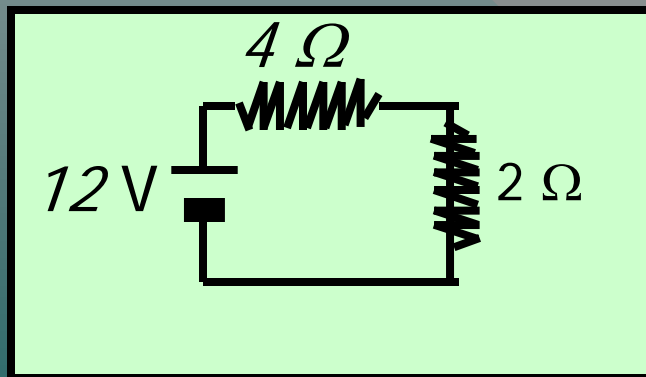
Example 3 (Cont.) Find the total current I_T .



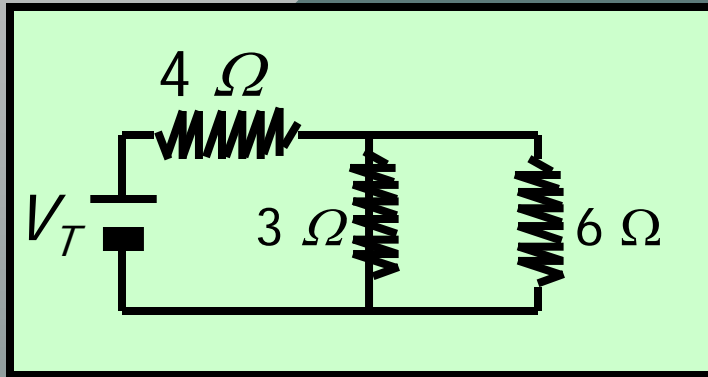
$$R_e = 6\ \Omega$$

$$I = \frac{V_T}{R_e} = \frac{12\ \text{V}}{6\ \Omega}$$

$$I_T = 2.00\ \text{A}$$



Example 3 (Cont.) Find the currents and the voltages across each resistor.



$$I_4 = I_T = 2\text{ A}$$

$$V_4 = (2\text{ A})(4\ \Omega) = 8\text{ V}$$

The remainder of the voltage: $(12\text{ V} - 8\text{ V} = 4\text{ V})$ drops across **EACH** of the parallel resistors.

$$V_3 = V_6 = 4\text{ V}$$

This can also be found from
 $V_{3,6} = I_{3,6}R_{3,6} = (2\text{ A})(2\ \Omega)$

(Continued . . .)

Example 3 (Cont.) Find the currents and voltages across each resistor.

$$V_4 = 8 \text{ V}$$

$$V_6 = V_3 = 4 \text{ V}$$

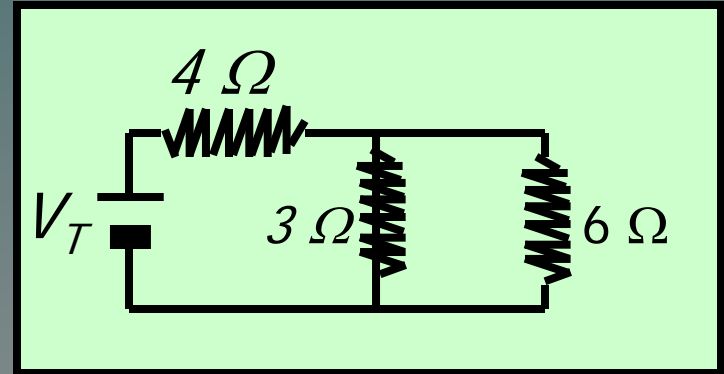
$$I_3 = \frac{V_3}{R_3} = \frac{4 \text{ V}}{3 \Omega}$$

$$I_3 = 1.33 \text{ A}$$

$$I_6 = \frac{V_6}{R_6} = \frac{4 \text{ V}}{6 \Omega}$$

$$I_6 = 0.667 \text{ A}$$

$$I_4 = 2 \text{ A}$$



Note that the **junction rule** is satisfied:

$$\Sigma I (\text{enter}) = \Sigma I (\text{leaving})$$

$$I_T = I_4 = I_3 + I_6$$

Kirchoff's Laws for DC Circuits

Kirchoff's first law: The sum of the currents entering a junction is equal to the sum of the currents leaving that junction.

Junction Rule: $\Sigma I (\text{enter}) = \Sigma I (\text{leaving})$

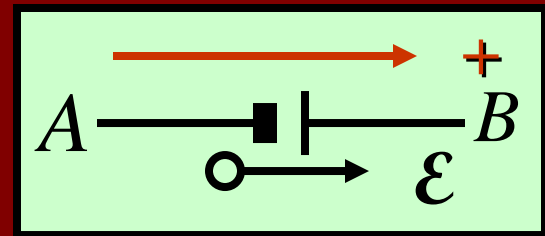
Kirchoff's second law: The sum of the emf's around any closed loop must equal the sum of the IR drops around that same loop.

Voltage Rule: $\Sigma \mathcal{E} = \Sigma IR$

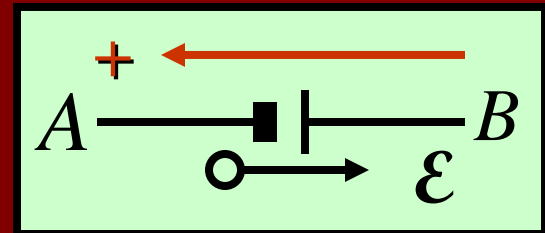
Sign Conventions for Emf's

- When applying Kirchoff's laws you must assume a consistent, positive **tracing direction**.
- When applying the **voltage rule**, emf's are **positive** if normal output direction of the emf is **with** the assumed tracing direction.

- If tracing from **A to B**, this emf is considered **positive**.

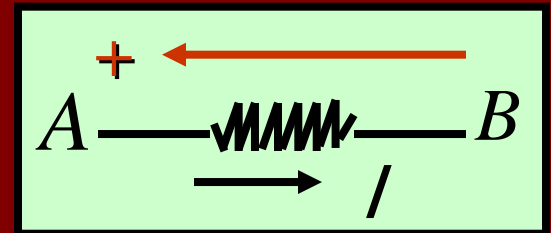
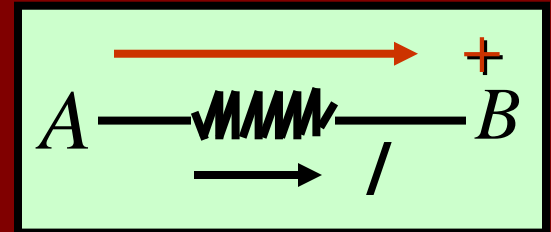


- If tracing from **B to A**, this emf is considered **negative**.



Signs of IR Drops in Circuits

- When applying the **voltage rule**, **IR drops** are **positive** if the assumed current direction is **with** the assumed tracing direction.
- If tracing from **A to B**, this IR drop is **positive**.
- If tracing from **B to A**, this IR drop is **negative**.



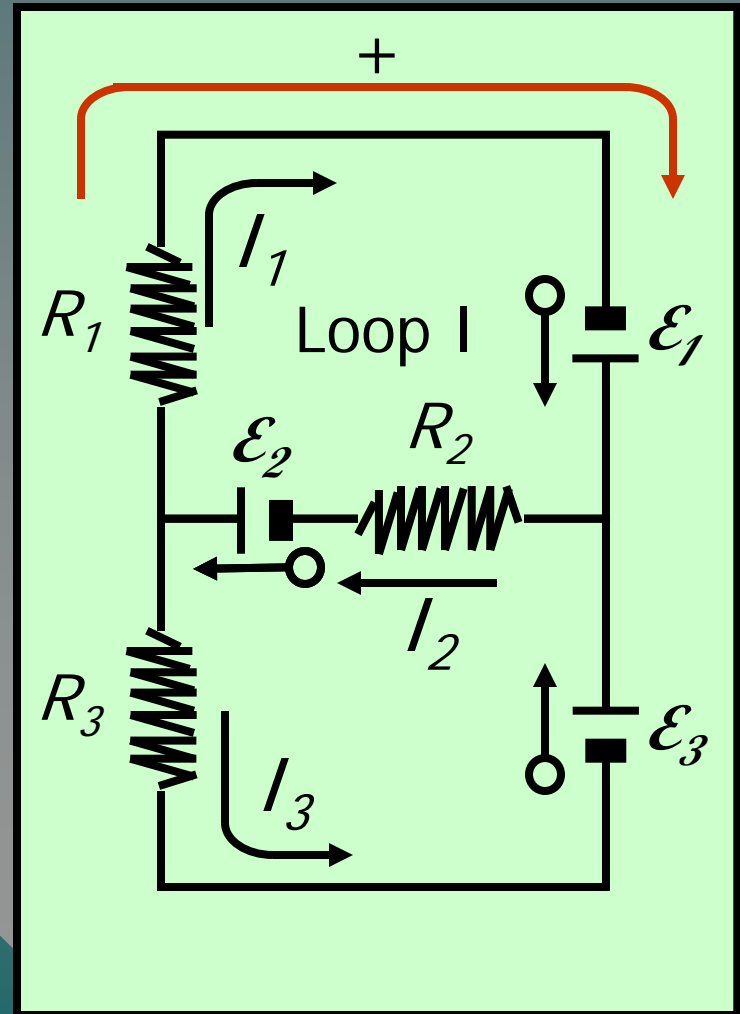
Kirchoff's Laws: Loop I

1. Assume possible consistent flow of currents.
2. Indicate positive output directions for emf's.
3. Indicate consistent tracing direction. (clockwise)

Junction Rule: $I_2 = I_1 + I_3$

Voltage Rule: $\Sigma \mathcal{E} = \Sigma IR$

$$\mathcal{E}_1 + \mathcal{E}_2 = I_1 R_1 + I_2 R_2$$



Kirchoff's Laws: Loop II

4. Voltage rule for Loop II:
Assume counterclockwise
positive tracing direction.

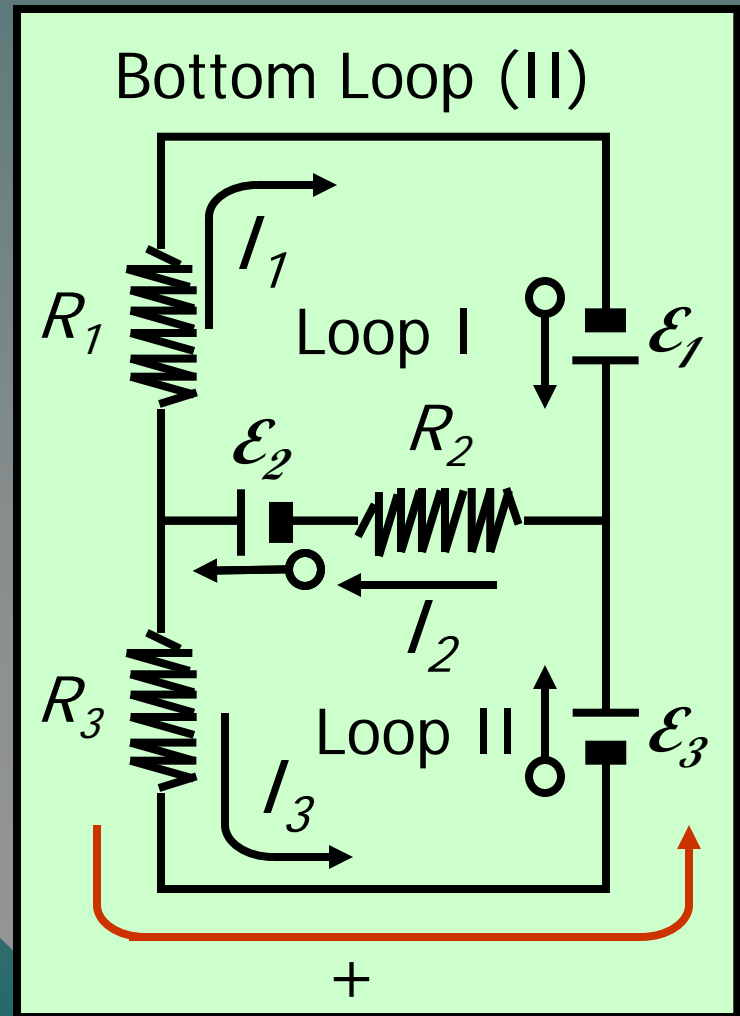
Voltage Rule: $\Sigma \mathcal{E} = \Sigma IR$

$$\mathcal{E}_2 + \mathcal{E}_3 = I_2 R_2 + I_3 R_3$$

Would the same equation
apply if traced **clockwise**?

Yes!

$$- \mathcal{E}_2 - \mathcal{E}_3 = -I_2 R_2 - I_3 R_3$$



Kirchoff's laws: Loop III

5. Voltage rule for Loop III:
Assume counterclockwise
positive tracing direction.

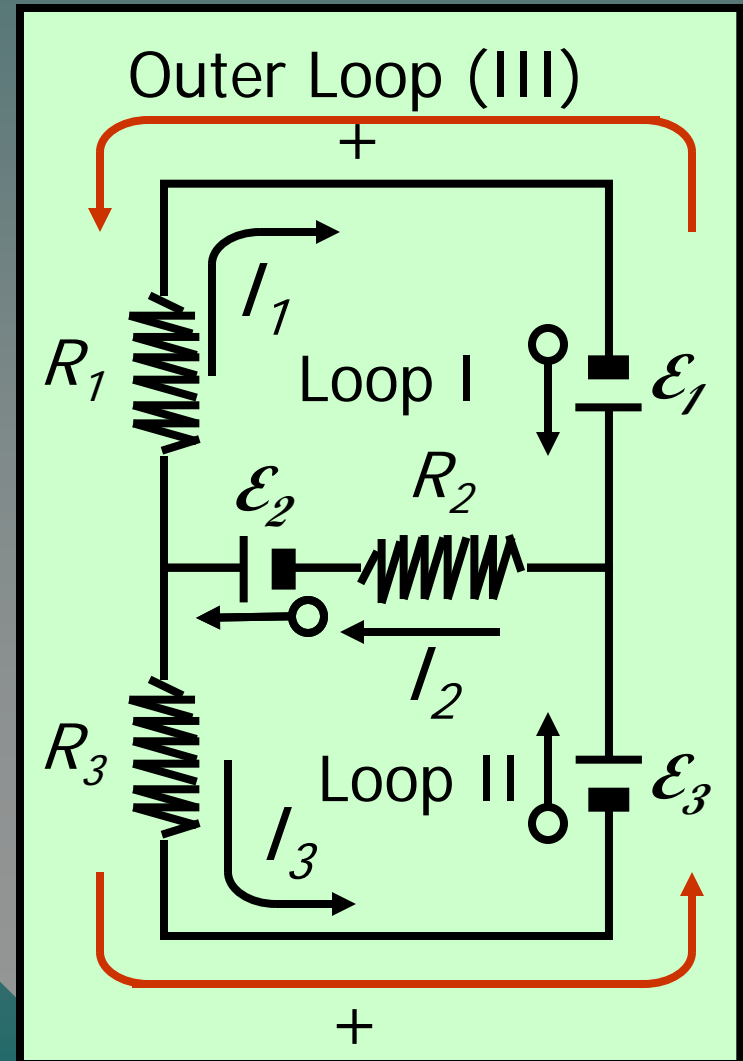
Voltage Rule: $\Sigma \mathcal{E} = \Sigma IR$

$$\mathcal{E}_3 - \mathcal{E}_1 = -I_1 R_1 + I_3 R_3$$

Would the same equation
apply if traced **clockwise**?

Yes!

$$\mathcal{E}_3 - \mathcal{E}_1 = I_1 R_1 - I_3 R_3$$



Four Independent Equations

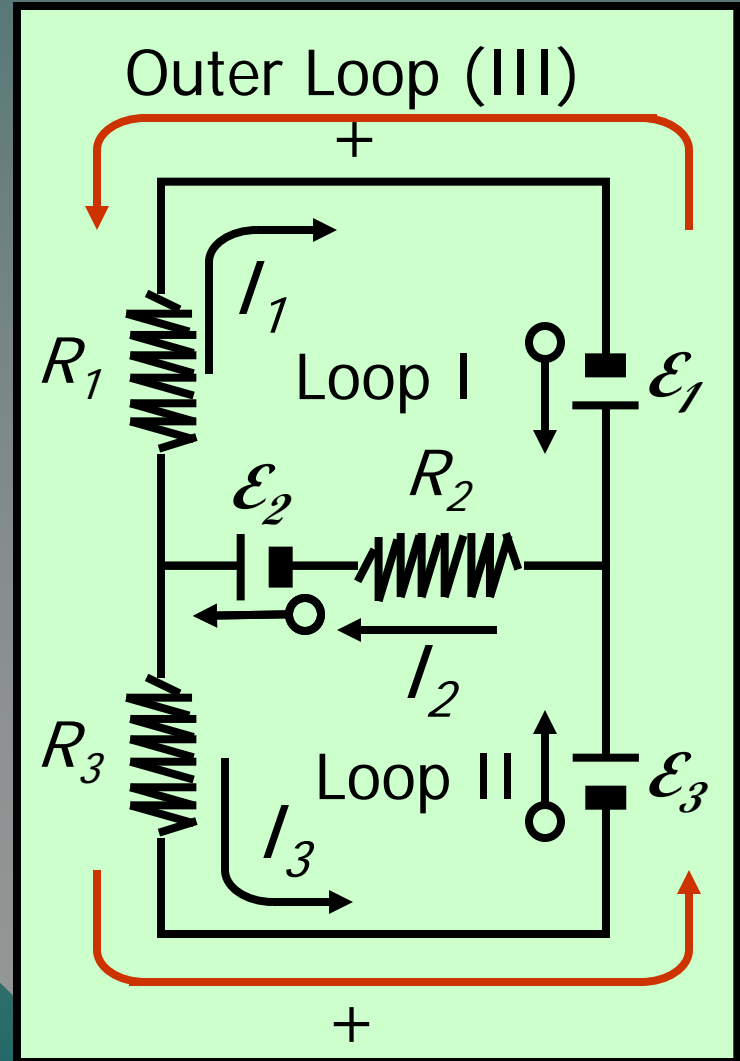
6. Thus, we now have four independent equations from Kirchoff's laws:

$$I_2 = I_1 + I_3$$

$$\mathcal{E}_1 + \mathcal{E}_2 = I_1 R_1 + I_2 R_2$$

$$\mathcal{E}_2 + \mathcal{E}_3 = I_2 R_2 + I_3 R_3$$

$$\mathcal{E}_3 - \mathcal{E}_1 = -I_1 R_1 + I_3 R_3$$



Example 4. Use Kirchoff's laws to find the currents in the circuit drawn to the right.

$$\text{Junction Rule: } I_2 + I_3 = I_1$$

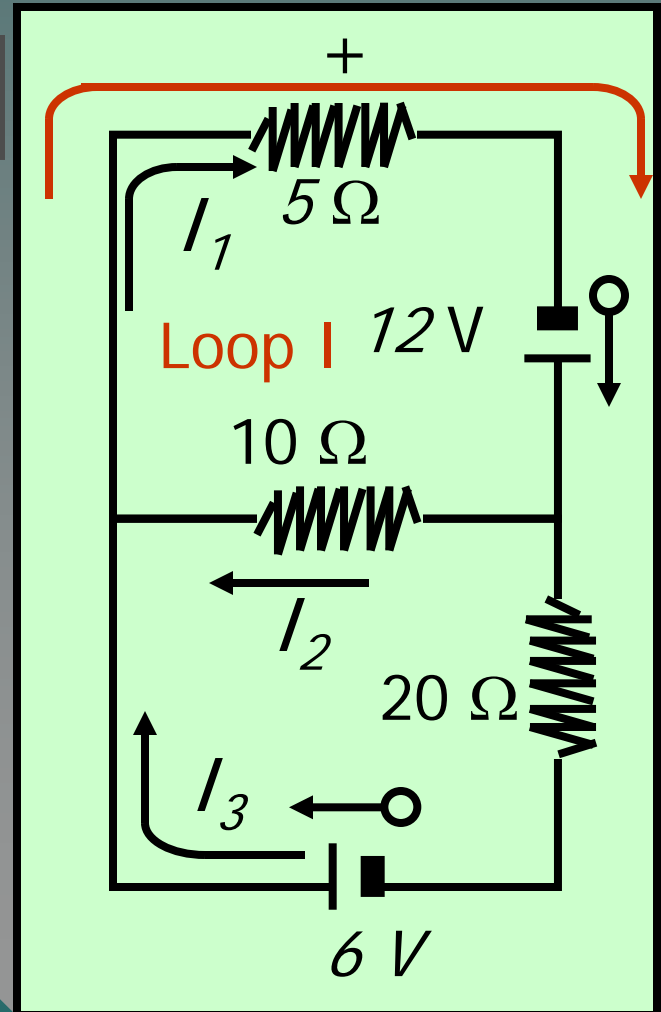
Consider **Loop I** tracing **clockwise** to obtain:

$$\text{Voltage Rule: } \sum \mathcal{E} = \sum IR$$

$$12 \text{ V} = (5 \Omega) I_1 + (10 \Omega) I_2$$

Recalling that $\text{V}/\Omega = \text{A}$, gives

$$5 I_1 + 10 I_2 = 12 \text{ A}$$



Example 5 (Cont.) Finding the currents.

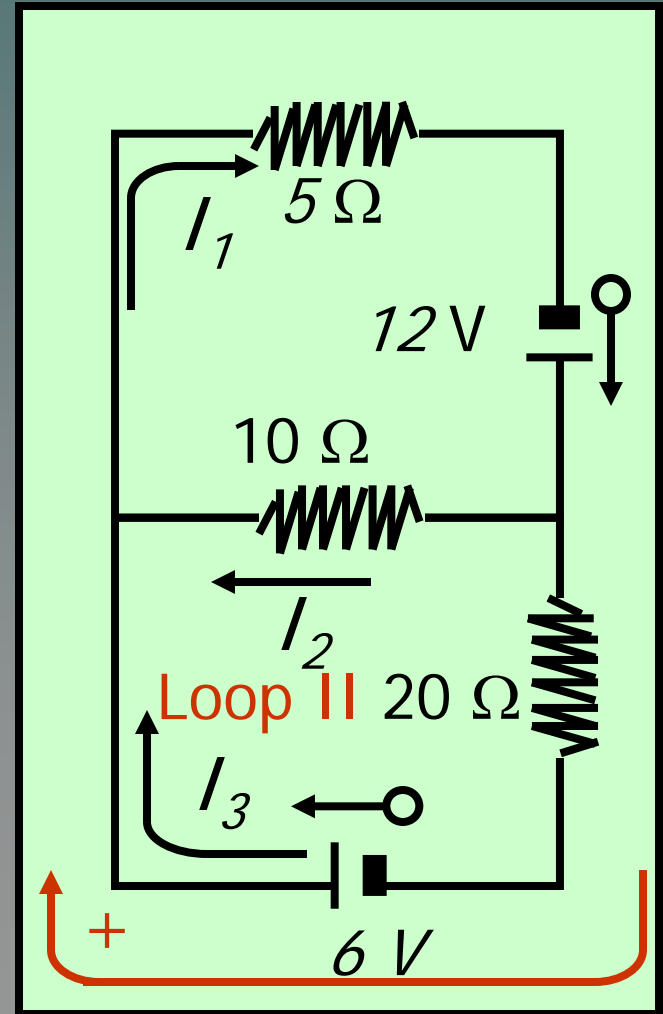
Consider **Loop II** tracing **clockwise** to obtain:

Voltage Rule: $\Sigma \mathcal{E} = \Sigma IR$

$$6 \text{ V} = (20 \ \Omega) I_3 - (10 \ \Omega) I_2$$

Simplifying: Divide by 2
and $\text{V}/\Omega = \text{A}$, gives

$$10 I_3 - 5 I_2 = 3 \text{ A}$$



Example 5 (Cont.) Three independent equations can be solved for I_1 , I_2 , and I_3 .

$$(1) \quad I_2 + I_3 = I_1$$

$$(2) \quad 5I_1 + 10I_2 = 12 \text{ A}$$

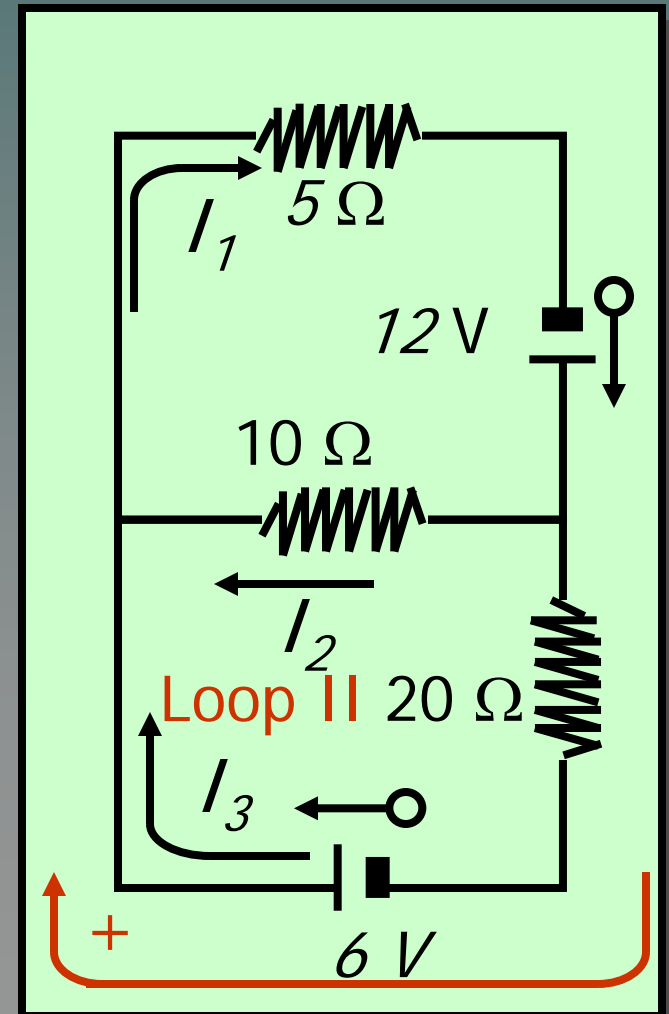
$$(3) \quad 10I_3 - 5I_2 = 3 \text{ A}$$

Substitute Eq. (1) for I_1 in (2):

$$5(I_2 + I_3) + 10I_2 = 12 \text{ A}$$

Simplifying gives:

$$5I_2 + 15I_3 = 12 \text{ A}$$



Example 5 (Cont.) Three independent equations can be solved.

$$(1) \quad I_2 + I_3 = I_1$$

$$(3) \quad 10I_3 - 5I_2 = 3 \text{ A}$$

$$(2) \quad 5I_1 + 10I_2 = 12 \text{ A}$$

$$15I_3 + 5I_2 = 12 \text{ A}$$

Eliminate I_2 by adding equations above right:

$$\begin{array}{r} 10I_3 - 5I_2 = 3 \text{ A} \\ 15I_3 + 5I_2 = 12 \text{ A} \\ \hline \end{array}$$

$$25I_3 = 15 \text{ A}$$

$$I_3 = 0.600 \text{ A}$$

Putting $I_3 = 0.6 \text{ A}$ in (3) gives:

$$10(0.6 \text{ A}) - 5I_2 = 3 \text{ A}$$

$$I_2 = 0.600 \text{ A}$$

Then from (1): $I_1 = 1.20 \text{ A}$

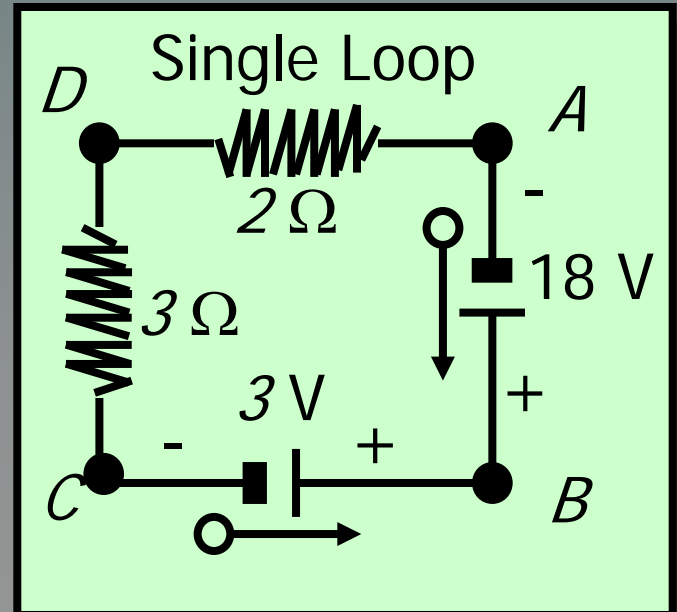
Summary of Formulas:

Rules for a simple, single loop circuit containing a source of emf and resistors.

Resistance Rule: $R_e = \Sigma R$

Current: $I = \frac{\Sigma \mathcal{E}}{\Sigma R}$

Voltage Rule: $\Sigma \mathcal{E} = \Sigma IR$



Summary (Cont.)

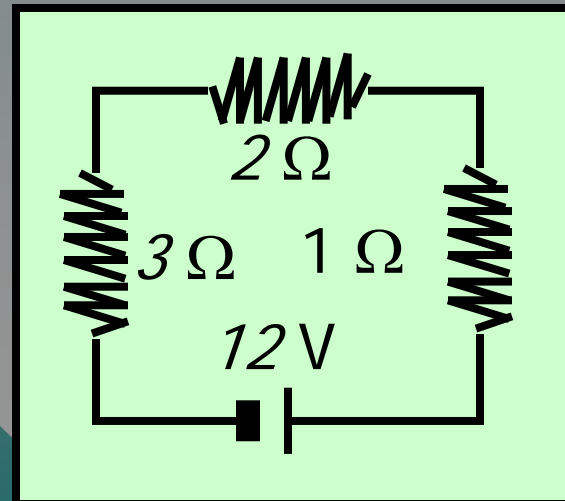
For resistors connected in series:

For series connections:

$$I = I_1 = I_2 = I_3$$
$$V_T = V_1 + V_2 + V_3$$

$$R_e = R_1 + R_2 + R_3$$

$$R_e = \Sigma R$$



Summary (Cont.)

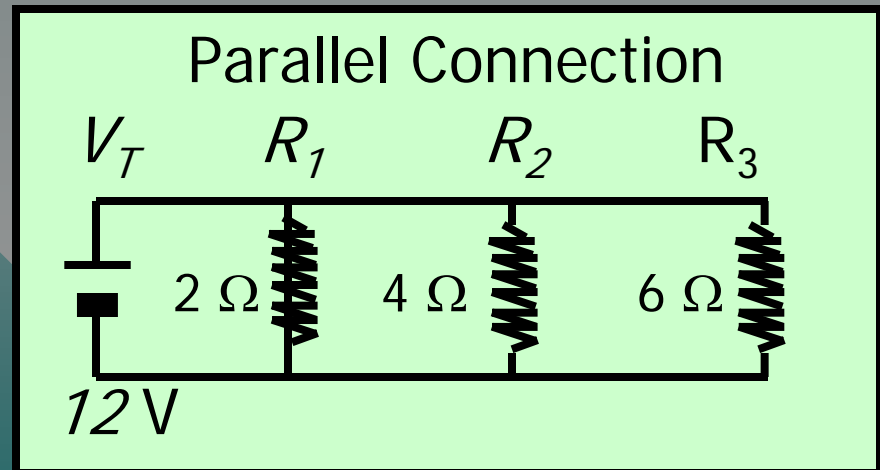
Resistors connected in parallel:

For parallel connections:

$$\frac{1}{R_e} = \sum_{i=1}^N \frac{1}{R_i}$$

$$R_e = \frac{R_1 R_2}{R_1 + R_2}$$

$$V = V_1 = V_2 = V_3$$
$$I_T = I_1 + I_2 + I_3$$



Summary Kirchoff's Laws

Kirchoff's first law: The sum of the currents entering a junction is equal to the sum of the currents leaving that junction.

Junction Rule: $\Sigma I (\text{enter}) = \Sigma I (\text{leaving})$

Kirchoff's second law: The sum of the emf's around any closed loop must equal the sum of the IR drops around that same loop.

Voltage Rule: $\Sigma \mathcal{E} = \Sigma IR$